

What's the time ?

A. Inscris dans la case le chiffre de l'heure qui lui correspond :

- | | | |
|--|-----|-------|
| <input type="checkbox"/> It's a quarter to five a.m. | 1. | 20:55 |
| <input type="checkbox"/> It's a quarter past noon | 2. | 21:30 |
| <input type="checkbox"/> It's six o'clock in the morning | 3. | 04:45 |
| <input type="checkbox"/> It's half past midnight | 4. | 12:15 |
| <input type="checkbox"/> It's half past nine in the evening | 5. | 17:50 |
| <input type="checkbox"/> It's a quarter to four in the afternoon | 6. | 06:00 |
| <input type="checkbox"/> It's twenty to eleven at night | 7. | 15:45 |
| <input type="checkbox"/> It's ten to six in the afternoon | 8. | 14:05 |
| <input type="checkbox"/> It's twenty to three at night | 9. | 00:30 |
| <input type="checkbox"/> It's ten past eight in the morning | 10. | 22:40 |
| <input type="checkbox"/> It's five past two p.m. | 11. | 02:40 |
| <input type="checkbox"/> It's five to nine in the evening | 12. | 08:10 |

B. Inscris l'heure en chiffre :

1. It's a quarter past five : _____
2. It's twenty to nine : _____
3. It's half past two : _____
4. It's nine past eight : _____
5. It's ten to eleven : _____
6. It's six past seven : _____
7. It's seven to nine : _____



8. It's a quarter to four : _____

9. It's twenty-three past ten : _____

10. It's twenty to eleven : _____

C. Ecris l'heure en toutes lettres :

1. 20.15 : _____

2. 07.30 : _____

3. 14.50 : _____

4. 18.23 : _____

5. 06.17 : _____

6. 20.45 : _____

7. 11.00 : _____

8. 14.55 : _____

9. 21.46 : _____

10. 22.30 : _____

11. 12.15 : _____

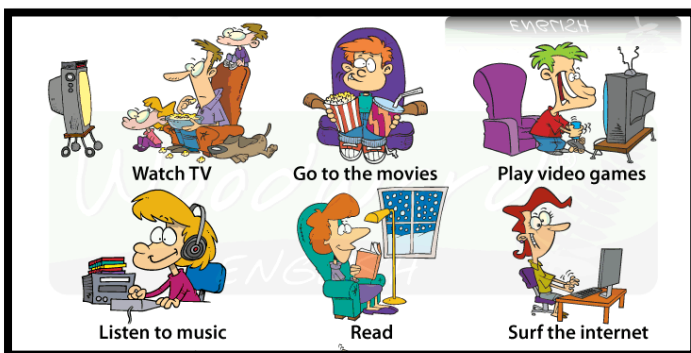


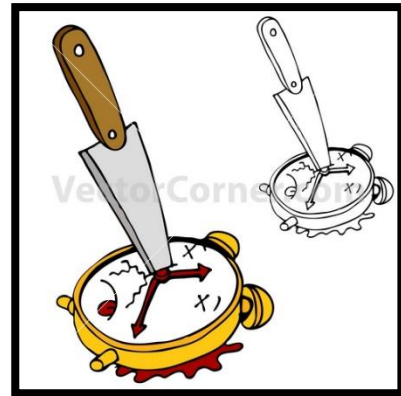

12. 05.42 : _____

13. 16.23 : _____

14. 10.45 : _____

15. 17.08 : _____

D. Expression avec « time ». Note en dessous de l'image, l'expression qui lui correspond :



Time heals all wounds - To kill time - Spare time - Time off
 Time is money - To bide one's time